



UNIVERSITY OF CAMBRIDGE INTERNATIONAL EXAMINATIONS  
International General Certificate of Secondary Education

CANDIDATE  
NAME

CENTRE  
NUMBER

--	--	--	--	--

CANDIDATE  
NUMBER

--	--	--	--

**DEVELOPMENT STUDIES**

**0453/01**

Paper 1

**For Examination from 2010**

SPECIMEN PAPER

**2 hours**

Candidates answer on the Question Paper.

No Additional Materials are required.

**READ THESE INSTRUCTIONS FIRST**

Write your Centre number, candidate number and name on all the work you hand in.

Write in dark blue or black pen.

Do not use staples, paper clips, highlighters, glue or correction fluid.

You may use a pencil for any diagrams, graphs or rough working.

Answer **all** the questions.

You may not need all the answer lines for your answer.

You should read and study the sources **before** answering the questions.

The Insert contains Figs. 2 and 7 for Questions 1 and 4.

At the end of the examination, fasten all your work securely together.

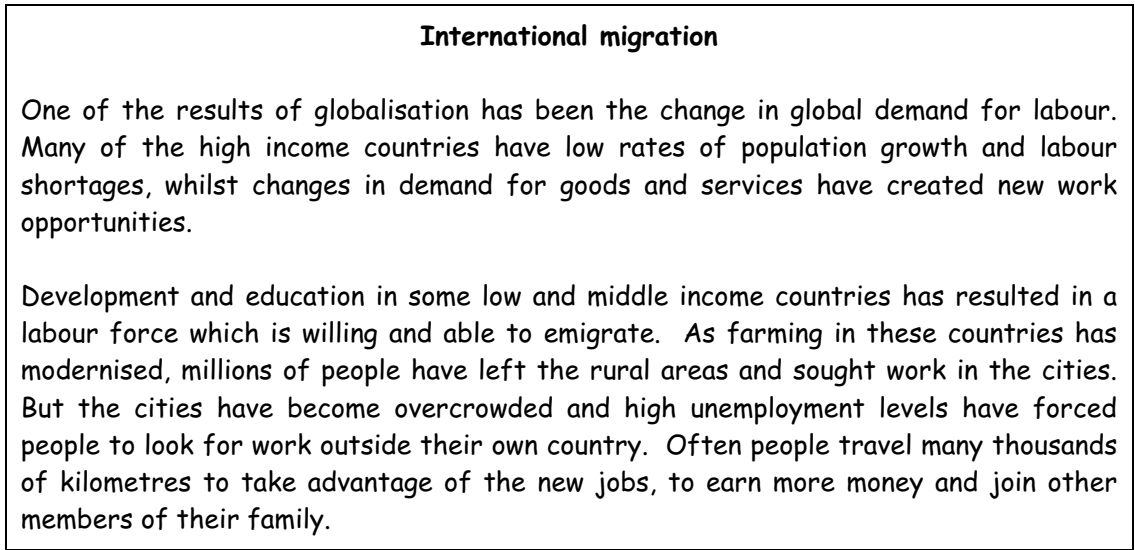
The number of marks is given in brackets [ ] at the end of each question or part question.

For Examiner's Use	
1	
2	
3	
4	
<b>Total</b>	

This document consists of **15** printed pages, **3** blank pages and **1** Insert.



1 Study Fig. 1, which shows information about international migration.



**Fig. 1**

**(a) (i)** What is meant by *globalisation*?

.....  
 ..... [1]

**(ii)** What term is used to describe migrants who leave their own country to find jobs? Choose **one** of the following and tick (✓) the box:

- asylum seekers
- economic migrants
- immigrants
- refugees

[1]

**(iii)** Suggest **two** reasons why some high income countries have labour shortages.

.....  
 .....  
 .....  
 ..... [2]

(b) (i) Give **two** problems faced by newly arrived international migrants.

.....  
.....  
.....  
..... [2]

(ii) Describe the benefits and problems for those left at home of having family members overseas.

.....  
.....  
.....  
.....  
..... [3]

(c) Study Fig. 2 (Insert), which shows information about recent international migration flows.

(i) Which country shown had the largest inflow of foreign population in 2004?

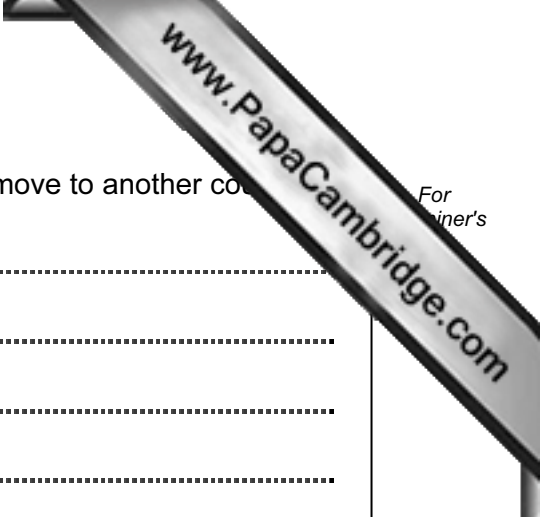
..... [1]

(ii) Which of the flows shown refers to illegal immigrants?

..... [1]

(iii) What does Fig. 2 show about the pattern of migration flows between countries of different levels of economic development. Use examples to justify your answer.

.....  
.....  
.....  
.....  
..... [3]



For  
inners

(d) Explain, using examples, why migrants make the decision to move to another country.

.....

.....

.....

.....

.....

.....

.....

.....

.....

.....

.....

.....

.....

.....

.....

.....

[6]

**[Total: 20 marks]**



- 2 Study Fig. 3, which gives information about the Philippines, a country in South East Asia which consists of over 7,000 islands.

Information about the Philippines	
Total population	73 million
GDP per person	US\$983
Population below poverty line	40.0%
Population growth rate (per year)	2.3% per year
Population under 16 years old	60.0%
National debt to World Bank and other agencies	Equals $\frac{1}{2}$ of annual GNP
Government economic programme	1. Set up tax-free export processing zones 2. Develop electronic and clothing industries 3. Develop industries processing food for export 4. Encourage more tourists
Number of natural disasters 1975–2000	250


**Fig. 3**

- (a) (i) What is meant by *below the poverty line*?

.....  
..... [1]

- (ii) What is likely to happen to the size of the total population in the next few years? Justify your answer.

.....  
.....  
.....  
..... [2]



(iii) Explain how the initiatives in the government economic programme will help back foreign debt.

.....

.....

.....

.....

.....

.....

..... [3]

(iv) What is meant by a *natural disaster*?

.....

..... [1]





(ii) Explain why some of the natural disasters and man-made problems occurring in the Philippines are likely to become worse over the next few years.

.....  
.....  
.....  
.....  
.....  
.....  
.....  
.....  
..... [4]

(c) With reference to a natural disaster:

- state the type of natural disaster
- name the place where it happened
- describe the way the government and NGOs dealt with the impact of the disaster.

.....  
.....  
.....  
.....  
.....  
.....  
.....  
.....  
.....  
.....  
.....  
..... [6]

[Total: 20 marks]





- (b) Study Fig. 6, which shows information about the squatter settlements in Caracas, capital of Venezuela.

**Squatter settlements in Caracas**

Many people have moved from the rural areas into the squatter settlements of Caracas. People have built makeshift homes on any piece of spare ground available and in this way huge illegal settlements have spread onto the steep slopes of the hills. Most of these people are unskilled except in agricultural work, they have very little education and most of them work in the informal sector of the city.

The government of Venezuela found it very difficult to deal with the problems of the arrival of three million squatters. However, since 2002 the government has set up Urban Land Committees to help squatters to get land titles and rights to the land which they were once accused of occupying illegally. Now these land titles are giving the people security from eviction, enabling them to borrow money and improve their houses. At the same time the government has been spending vast sums of money, earned from oil revenues, to improve the lives of those living in the squatter settlements. It is a project that will take many years.

**Fig. 6**

- (i) Give **two** reasons why people prefer to live in Caracas rather than in the rural areas.

.....

.....

.....

..... [2]

- (ii) Explain, using an example, what is meant by *work in the informal sector*.

.....

.....

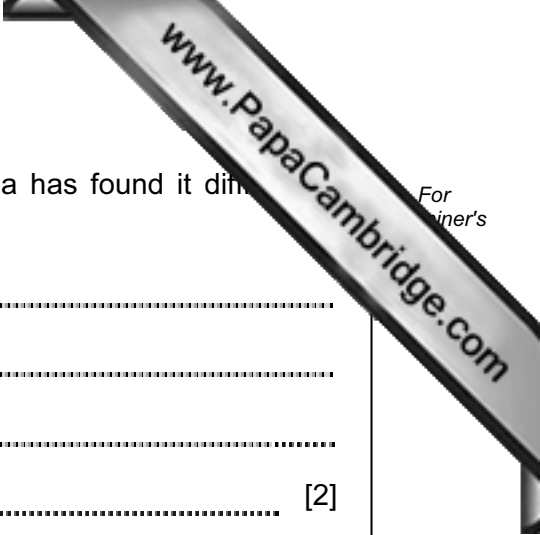
.....

..... [2]

- (iii) Why might it be difficult for someone to get a loan if they do not have legal rights to the land?

.....

..... [1]



(iv) Suggest **two** reasons why a country such as Venezuela has found it difficult to deal with the problems of rapid urban growth.

.....  
.....  
.....  
..... [2]

(c) Describe ways in which governments and local people can improve conditions in squatter settlements.

.....  
.....  
.....  
.....  
.....  
.....  
.....  
.....  
.....  
.....  
.....  
.....  
.....  
..... [6]

[Total: 20 marks]

4 Study Fig. 7 (Insert), which shows the changes that occurred in Sabtenga, a village in Burkina Faso, one of the poorest countries in West Africa.

(a) (i) What was the main means of transport used by the villagers in 1986?

..... [1]

(ii) The farming in Sabtenga in 1986 was traditional peasant farming. Describe the characteristics of this type of farming.

.....  
.....  
.....  
..... [2]

(iii) Give **three** pieces of evidence from Fig. 7 to show that the general standard of living improved between 1986 and 2006.

.....  
.....  
.....  
.....  
.....  
..... [3]

(b) What evidence is there to show that people in Sabtenga are still suffering from rural poverty? Give **three** examples from Fig. 7.

.....  
.....  
.....  
.....  
.....  
..... [3]



(c) (i) Which **three** pieces of evidence from Fig. 7 might show that women in Sabtenga in 2006 experience sexual inequality?

.....

.....

.....

.....

.....

..... [3]

(ii) Suggest ways in which changes since 1986 in Sabtenga have helped to give women more economic and political power.

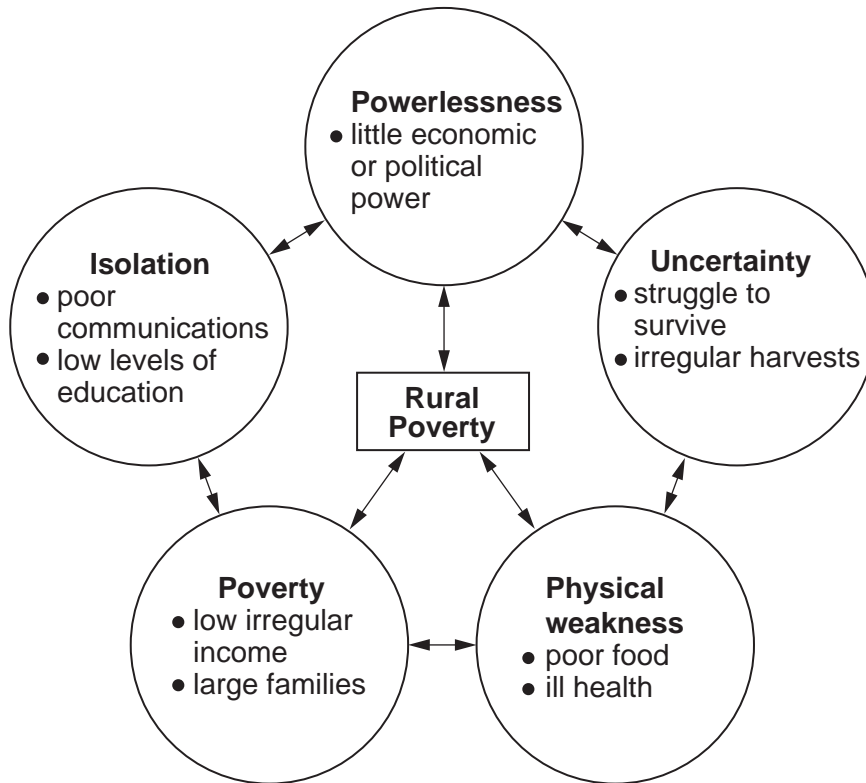
.....

.....

.....

..... [2]

Study Fig. 8, which shows the five interlinked factors that affect the rural poor.



(Source: based on Fig. 4.1 p51 Chris Dixon Rural Development in the Third World. Routledge 1990 ISBN 0-415-01597-9)

**Fig. 8**





---

*Copyright Acknowledgements;*

Question 1 Fig. 2 © [www.pstalker.com/migration/mg\\_map.htm](http://www.pstalker.com/migration/mg_map.htm)

Permission to reproduce items where third-party owned material protected by copyright is included has been sought and cleared where possible. Every reasonable effort has been made by the publisher (UCLES) to trace copyright holders, but if any items requiring clearance have unwittingly been included, the publisher will be pleased to make amends at the earliest possible opportunity.

University of Cambridge International Examinations is part of the Cambridge Assessment Group. Cambridge Assessment is the brand name of University of



UNIVERSITY OF CAMBRIDGE INTERNATIONAL EXAMINATIONS  
International General Certificate of Secondary Education

www.PapaCambridge.com

---

**DEVELOPMENT STUDIES**

**0453/01**

Paper 1

**For Examination from 2010**

SPECIMEN INSERT

**2 hours**

---

**READ THESE INSTRUCTIONS FIRST**

This Insert contains Figs. 2 and 7 for Questions **1** and **4**.

---

This document consists of **3** printed pages and **1** blank page.



Selected International Migration Flows

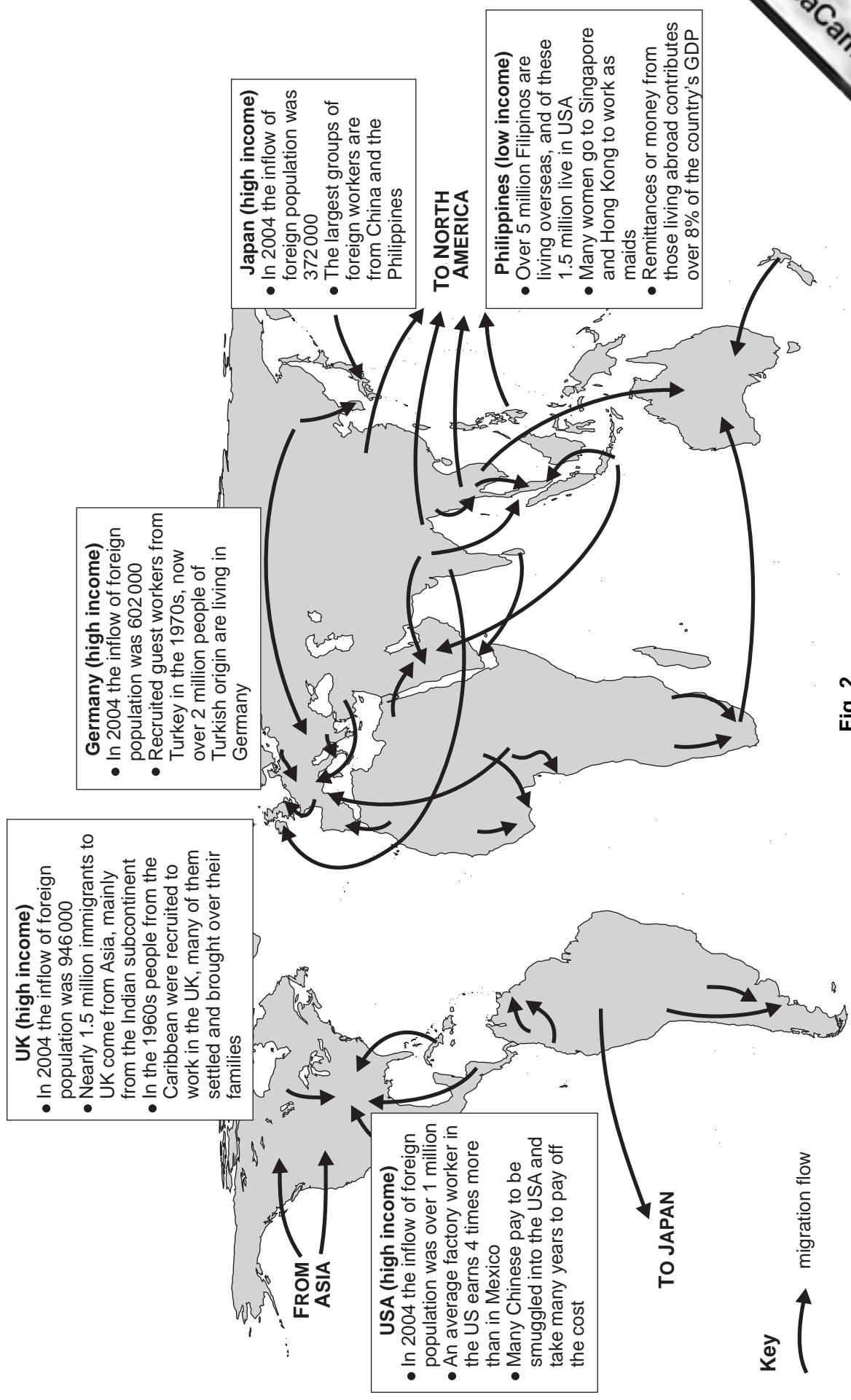


Fig. 2

Sabtenga in 1986	Sabtenga in 2006
Communications: walking 4 kms to Garango, the nearest town.	New dirt road to Garango. Heavy vehicles cannot reach village. Donkey carts are used by everybody. Men have mopeds and motorbikes.
No electricity.	Electricity since 2002 in Garango town. Solar panels operated a few TVs in village.
No telephone link.	Cell phones, recharged in shop in Garango. An internet café in Garango.
Men cleared land by hand. Young men migrated to work in Ghana or Cote d'Ivoire.	Men ploughed fields with oxen. Many men migrated and some took their wives. Wives left behind depended on husbands sending money back as remittances.
Women, life very hard: – did most of farming with hoes and carried crops to village – spent 4 hours each day collecting water from communal well and 2–3 hours pounding grain – spent 4 hours every 2–3 days gathering firewood – had no time to earn extra income.	Women still did most of the farming with hoes but life was easier because: – some had bicycles – each household had its own water pump – crops and firewood were carried in donkey carts – they had time to earn extra money. A women's co-operative: – funded small business activities selling food – had planted a hectare of trees – planned to own a field of peanuts and hire oxen to plough it.
Education – primary school too small to take all children.	All children go to a 6 grade primary school and school fees are low. 3 secondary schools in Garango but fees too expensive for most villagers to send all their children.
Infant Mortality rates high. Health clinic just starting.	Modern health centre with maternity clinics and inoculations for all children. Some mothers cannot afford to go to maternity clinics. Infant and maternal mortality is still high. Latrines are being built for each family.

(Source of information: Two decades of change in an African Village pp2-9 New Internationalist No. 389 May 2006  
© New Internationalist Publications Ltd 2006 ISSN 0305-9529)

**Fig. 7**

